






Year 5/6 Marvellous Maps

End of unit quiz

1. An atlas is a book of _____.
2. A map key is to explain what each _____ is.
3. All maps are the same. True or false?
4. Some maps show you the physical features. True or false?
5. Economic maps show how people make money. True or false?
6.  is a m_____ r_____.
7.  represents a small town. True or false?
8.  represents a national/international boundary.
9. Symbols are often used on maps. True or false?
10. Symbols are used to save _____.
11. A key is used to _____ what each symbol _____.
12. It is easy to guess what **every** symbol means. True or false?
13. Label the following symbols:



14. Compasses are important for map readers. True or false?
15. Compasses can have _____, _____ or _____ points.
16. These points are known as ordinal points. True or false?
17. There are 3 definitions of _____ that we use with maps.
18. The direction in which any magnetic compass will point is called _____ north.
19. Ordnance Survey maps always have east facing the top. True or false?



Year 5/6 Marvellous Maps

End of unit quiz

20. Compasses have been used for over 3,000 years. True or false?
21. Maps have _____ and _____ lines.
22. Using a grid makes it _____ the area to search.
23. Grid references are used to make it more difficult to find locations on a map. True or false?
24. There are numbers on the grid called _____ and _____.
25. Eastings run from _____ to _____.
26. Northings run from _____ to _____.
27. The grid reference is for the bottom left/bottom right of the square.
28. When identifying a grid reference, you should always begin with the _____.
29. Label the 8 points of the compass.
30. Identify the grid reference for the castle. (,)

